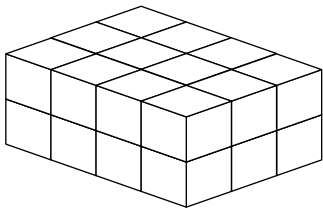


Volume of Shapes

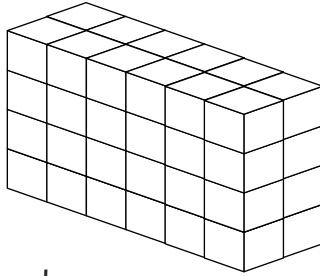
Find the volume of these shapes.

1.



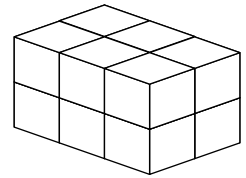
volume:

2.



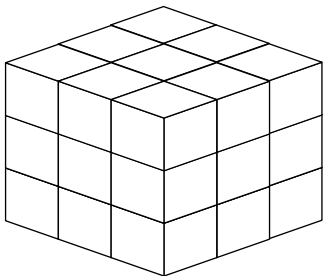
volume:

3.




volume:

4.



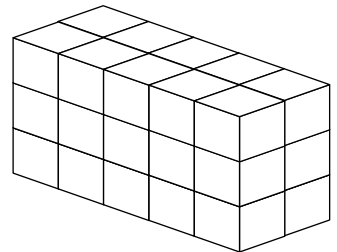
volume:

5.



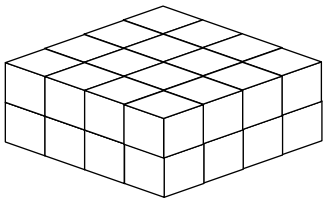
volume:

6.



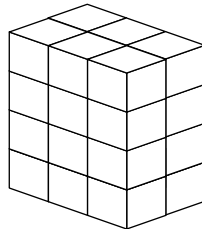
volume:

7.



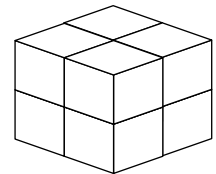
volume:

8.



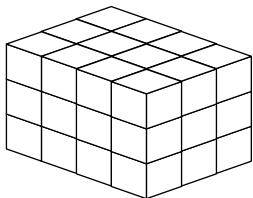
volume:

9.



volume:

10.

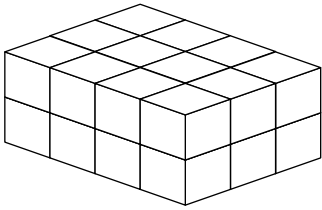


volume:

Volume of Shapes Answers

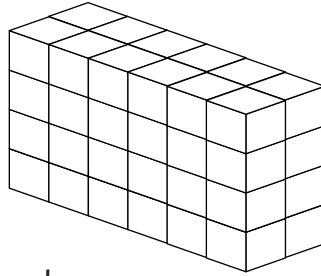
Find the volume of these shapes.

1.



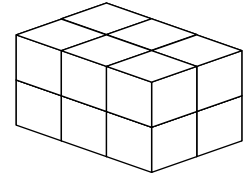
volume:
24 cubic units

2.



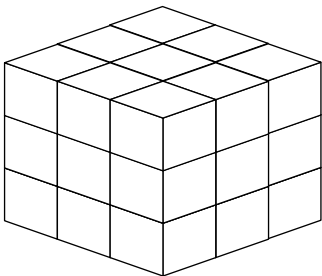
volume:
48 cubic units

3.



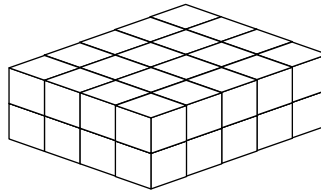
volume:
12 cubic units

4.



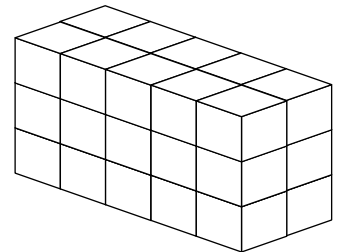
volume:
27 cubic units

5.



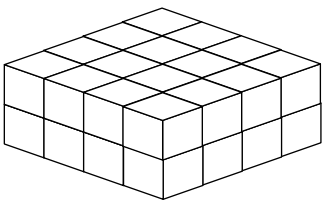
volume:
40 cubic units

6.



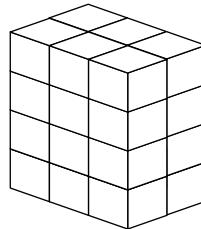
volume:
30 cubic units

7.



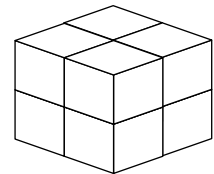
volume:
32 cubic units

8.



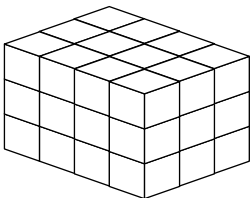
volume:
24 cubic units

9.



volume:
8 cubic units

10.



volume:
36 cubic units